

Name of the candidate

Reg. No.

STD-2-25 F1

Maximum Marks: 100

Time: 90 Minutes

Question 1. Who am I? Identify and write the names in the space given: (2x2=4)

a) I am a very clever and cunning animal.

I am a

b) I always land on my paws. People keep me as a pet.

I am a

Question 2. Choose the correct option from the brackets and write the answer in the space given: (2x2=4)

a) Chick is to hen as pup is to (cow, dog, duck)

b) Bed is to sleep as sofa is to (eat, cry, sit)

Question 3. Rearrange the following words to form meaningful sentences: (2x2=4)

a) my / vegetable / mother / cooks / biriyani

.....

b) she / mangoes / likes / sweet

.....

Question 4. Fill in the blanks by choosing the correct options from the brackets: (3x2=6)

(a baker, Mohiniyattam, 10, Bharatanatyam, 12)

a) is a famous classical dance form from Kerala.

b) Bread, cake, and buns are made by

c) There are months in a year.

Question 5. Circle the odd one out in each row: (4x1=4)

a) elephant, lion, rabbit, cheetah

b) frog, snail, tortoise, turtle

c) palm, ankle, fingers, thumb

d) leg, eye, ear, nose

Question 6. Arrange the following numbers in ascending order: (1x2=2)

340, 217, 165, 290, 200.

Question 7. Study the given calendar and answer the following questions: (3x2=6)

MARCH 2024						
SUN	MON	TUE	WED	THU	FRI	SAT
					1	2
3	4	5	6	7	8	9
10	11	12	13	14	15	16
17	18	19	20	21	22	23
24	25	26	27	28	29	30
31						

- a) What is the date of the second Saturday in March 2024?
.....
- b) How many Sundays are there in March 2024?
.....
- c) Write the date of the first Monday in March 2024.
.....

Question 8. Complete the following sentences by choosing the correct word from the brackets: (4x2=8)

(spring, cotton, sticks, ice)

- a) During summer, we like to wear clothes.
- b) Igloos are made from blocks of
- c) Colourful flowers bloom and birds sing in
- d) Huts are made of mud and

Question 9. Fill in the blanks choosing the correct word from the brackets: (3x2=6)

- a) They good players. (is / are)
- b) We a big house. (have / has)
- c) I many friends. (have / has)

Question 10. Answer the following questions: (1x2=2)

Nivya bought a pen for Rs.20, a book for Rs.45 and an eraser for Rs.5.
She gave Rs.100 to the shopkeeper. How much money did she receive as balance amount from the shopkeeper?
.....

Question 11. Write the two numbers that come next in each series. (2x2=4)

- a) 20, 26, 32,,,
- b) 51, 56, 61,,,

Question 12. Match the animals in Column A with what they produce in Column B by drawing lines: (4x2=8)

Column A	Column B
i) Cow	Wool
ii) Honeybee	Egg
iii) Hen	Honey
iv) Sheep	Milk

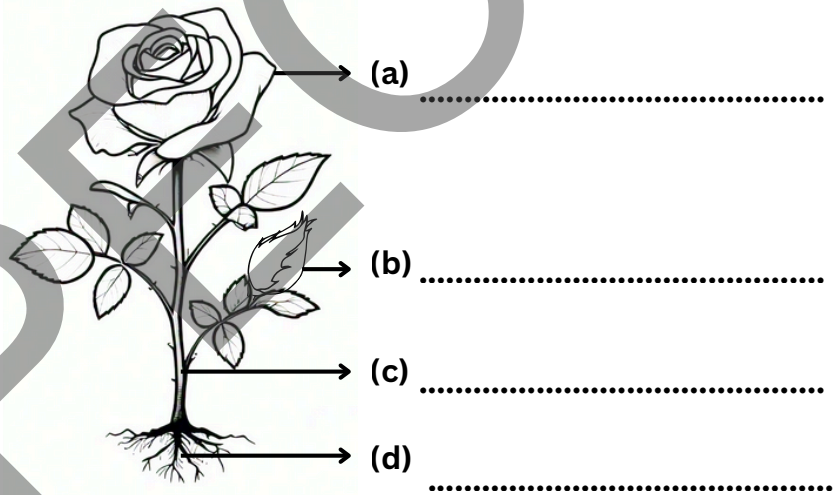
Question 13. Find and circle the names of two fruits and two vegetables hidden in the grid. Then write the names of the fruits and the vegetables under the given headings: (8x1=8)

A	P	P	L	E	A	N	O
B	G	F	E	U	C	P	N
N	O	R	A	N	G	E	I
K	A	L	A	B	W	H	O
P	O	T	A	T	O	E	N

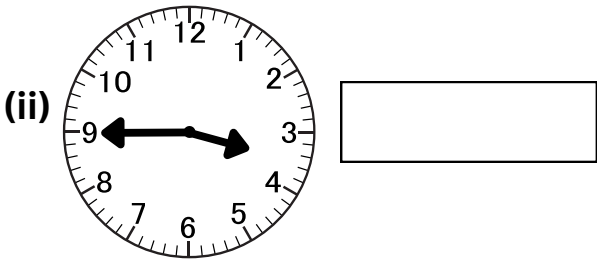
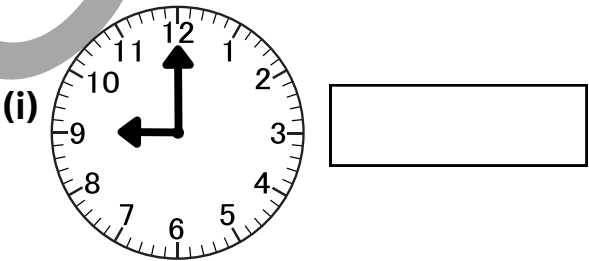
FRUITS
VEGETABLES

Question 14. See the picture of a plant. Then, write the names of the parts of the plant in the given space. Choose from the box: (4x2=8)

Stem, Bud, Leaf, Flower, Root



Question 15. Look at the given pictures and write the correct time in each box: (2x3=6)



Question 16. Answer the following questions. Choose from brackets:

(5x2=10)

a) Which festival is called the festival of colours?

..... (Navarathri / Holi)

b) What sport does Sachin Tendulkar play?

..... (cricket / tennis)

c) Who does the building construction and brickwork?

..... (engineers / masons)

d) A person who makes gold ornaments is a


..... (goldsmith / cobbler)

e) From where do we get ground water?

..... (well / oceans)

Question 17. Complete the picture by joining the numbered dots in order and write the name of the picture correctly in the space provided.

(10x1=10)



Name of the picture:

Name of the Examiner Signature